



Government of Nepal  
Ministry of Physical Infrastructure and Transport

# Collection of objective questions of written exams for driving licence of category B (Car, Jeep, Delivery Van)

2078



Government of Nepal  
Ministry for Physical Infrastructure and Transport  
Department of Transport Management



**Government of Nepal**  
**Ministry of Physical Infrastructure and Transport**

**Collection of objective questions of written exams for  
driving licence of category B (Car, Jeep, Delivery Van)**

**Table of Contents**

1. Knowledge related to driving .....	1
2. Knowledge related to vehicular act/regulation .....	14
3. Technical or mechanical knowledge of vehicle .....	23
4. Conceptual knowledge related to environment pollution .....	30
5. Knowledge related to accidental awareness .....	33
6. Knowledge related to traffic signals.....	40
Instructions to Transport Management Office .....	55



Government of Nepal

Ministry of Physical Infrastructure and Transport

## Collection of objective questions of written exams for driving licence of category B (Car, Jeep, Delivery Van)

### 1. Knowledge related to driving

S.N.	Questions	Correct Answer			
		a	b	c	d
1.	<b>Who should first be prioritized on Zebra Crossing?</b> (a) Male (b) Female (c) Cattle (d) Pedestrian				√
2.	<b>How would one know the speed of the vehicle ahead getting slow?</b> (a) By brake Light. (b) Through the driver's gestures (c) If the smoke of the silencer is getting less (d) None of them	√			
3.	<b>Whom should be prioritized while crossing the road?</b> (a) School students (b) Physically disabled (c) Senior Citizen (d) All of the above				√
4.	<b>Which vehicle should be given priority while driving on road?</b> (a) Hearse Van. (b) Fire brigade (c) Ambulance (d) All of the above				√
5.	<b>What should be done to overtake the vehicle moving ahead?</b> (a) By turning on headlight (b) By blowing horn (c) By turning on side light (d) All of the above				√
6.	<b>On which side of the road do people drive their vehicle in Nepal?</b> (a) Right side (b) Left side (c) whatever side available (d) None of the above		√		
7.	<b>In which speed is the consumption of fuel low?</b> (a) Slow speed (b) Medium speed (c) High speed (d) Both slow and medium speed			√	
8.	<b>What would you do when you see an ambulance is following your vehicle?</b> (a) Stop your vehicle (b) Give side, let it go (c) Increase speed (d) Overtake it		√		
9.	<b>In what kind of road is most dangerous if the brake fails?</b> (a) Road going uphill (b) Road going downhill (c) Flat road (d) Gravel road		√		
10.	<b>In which speed is the consumption of fuel high?</b> (a) Slow Speed (b) Medium Speed (c) High speed (d) All of the above	√			
11.	<b>Which vehicle either going up or down, should give side?</b> (a) Moving upward. (b) Moving downward. (c) Both of them (d) None of them		√		



Government of Nepal

Ministry of Physical Infrastructure and Transport

## Collection of objective questions of written exams for driving licence of category B (Car, Jeep, Delivery Van)

12.	<b>Which vehicle either going straight or turning round should be prioritized ?</b> (a) Vehicle turning round (b) Vehicle going straghit (c) Both of them (d) None of them	√			
13.	<b>Why should one keep on changing gear ?</b> (a) To decrease speed (b) To increase speed (c) To blow horn (d) Both to increase or to decrease speed				√
14.	<b>Which side should be used for driving low speed vehicle slowly in Nepal?</b> (a) From middle (b) From right (c) From left (d) Whatever side one prefers			√	
15.	<b>Which part in a four wheeler do the feet control?</b> (a) Clutch (b) Brake (c) Accelerator (d) All of the above				√
16.	<b>Which vehicle either moving upwards or moving downwards should be prioritized?</b> (a) Vehicle moving downward (b) Vehicle moving upward (c) Side shoudn't be given (d) Whosoever can, should go ahead		√		
17.	<b>Which vehicle doesn't move on road?</b> (a) Ship (b) plane (c) Helicopter (d) All of the above				√
18.	<b>What should a driver do to know whether the speed of the vehicle ahead is low or high?</b> (a) By asking the driver (b) From the gestures of the driver (c) Guessing (d) None of these.				√
19.	<b>What does the oil pressure indicator show in vehicle?</b> (a) Diesel (b) Mobil (c) Water (d) Petrol		√		
20.	<b>When should the seat belt be used ?</b> (a) Those who sit at the front (b) As soon as the police see (c) while moving down (d) While moving up	√			
21.	<b>Which vehicle should not be prioritized first while driving?</b> (a) Car (b) Motorcycle (c) Truck (d) All of the above				√
22.	<b>What should be done to allow vehicle coming from rear side to move ahead?</b> (a) By gesturing from hand (b) By turning on side light (c) Both A & B (d) None of them			√	



Government of Nepal

Ministry of Physical Infrastructure and Transport

## Collection of objective questions of written exams for driving licence of category B (Car, Jeep, Delivery Van)

23.	<b>In Nepal driving on which side is punishable?</b> (a) Right side (b) Left side (c) Both (d) None of them	√			
24.	<b>What is the main function of left hand in four wheelers?</b> (a) To Brake (b) To control handle (c) To use hand brake (d) All of the above			√	
25.	<b>What should you do when you see a fire brigade coming behind you?</b> (a) Stop the vehicle (b) Give side (c) Increase Speed (d) Ignore		√		
26.	<b>What should one do while turning the vehicle?</b> (a) Turn the side light (b) Lower the speed (c) Look both sides (d) All of the above				√
27.	<b>What kind of vehicle should be prioritized?</b> (a) Vehicle moving downward (b) Vehicle moving upward (c) Both of them (d) Non of them		√		
28.	<b>What should one do either to lower or increase the speed ?</b> (a) Change gear (b) Press or release accelerator (c) Both of them (d) None of them			√	
29.	<b>Which lane of the road should be used while driving vehicle at higher speed ?</b> (a) Middle Lane (b) Side Lane (c) Both of them (d) None of them	√			
30.	<b>In general, when should one turn on the headlight?</b> (a) Day Time (b) Dark/Night Time (c) On seeing traffic police (d) On having accident		√		
31.	<b>What do we understand by temporary route permit ?</b> (a) To drive on the permitted road only (b) To get permission to drive on the road which is not stated on the regular permit (c) To get permission to drive along the local road (d) To drive time and again		√		
32.	<b>What shouldn't be done before you get driving license?</b> (a) Not to drive the vehicle (b) Not to sit in the vehicle (c) Not to buy vehicle (d) None of the above	√			
33.	<b>What should one do to his or her vehicle while the VIP vehicle is on the road ?</b> (a) To stop and give way (b) To blow horn (c) To drive vehicle (d) All of the above	√			



Government of Nepal

Ministry of Physical Infrastructure and Transport

## Collection of objective questions of written exams for driving licence of category B (Car, Jeep, Delivery Van)

34.	<p><b>How should one behave to the traffic police when she or he stops the vehicle showing your fault?</b></p> <p>(a) To insist that you haven't done anything wrong            (b) To run away from the traffic police.            (c) To realize your mistake politely.            (d) To make other drivers your witness insisting that you haven't done anything wrong</p>			√	
35.	<p><b>How much fuel should be better to put in the vehicle?</b></p> <p>(a) Only a little (b) Half Tank (c) Fill the tank if fuel is finished. (d) Full tank if possible</p>				√
36.	<p><b>What kind of vehicle isn't allowed for use in public transportation?</b></p> <p>(a) Private vehicle (b) Public vehicle (c) Tourist vehicle (d) All of the above</p>	√			
37.	<p><b>What do you mean by conductor/steward/attendant?</b></p> <p>(a) One who drives (b) One who has got license to drive            (c) One who assists in vehicle (d) All of the above</p>			√	
38.	<p><b>What kind of vehicle has L sign?</b></p> <p>(a) Government vehicle (b) Learner's vehicle            (c) Diplomatic vehicle (d) Public vehicle</p>		√		
39.	<p><b>How would one signal while overtaking the vehicle ahead?</b></p> <p>(a) Requesting him/her to stop by phone (b) Gesturing with hand            (c) Blowing Horn (d) None of the above</p>			√	
40.	<p><b>For what purpose should the looking glass be used?</b></p> <p>(a) To overtake (b) To back (c) Both of them (d) Not of them</p>			√	
41.	<p><b>What quality should a driver have?</b></p> <p>(a) Patience (b) Sweet speaking (c) Friendly (d) All of the above</p>				√
42.	<p><b>What should be done for safe journey?</b></p> <p>(a) Follow the traffic rules (b) Drive randomly            (c) Drive speedily (d) All of the above</p>	√			
43.	<p><b>What should be done while driving if anything is not visible during rain?</b></p> <p>(a) Switch wiper (b) Speed up (c) Stop the vehicle (d) Blow horn</p>	√			
44.	<p><b>In which gear should the vehicle be parked on sloped road?</b></p>	√			



Government of Nepal

Ministry of Physical Infrastructure and Transport

## Collection of objective questions of written exams for driving licence of category B (Car, Jeep, Delivery Van)

	(a) No 1 gear (b) No 3 gear (c) Back gear (d) No 5 gear.				
45.	<b>Among the following options, which one isn't in electric vehicle?</b> (a) Silencer pipe (b) Accelerator (c) Clutch (d) Gear	√			
46.	<b>What kind of vehicle is it when it has Ba 1 ba number plate?</b> (a) Private motorcycle (b) Government motorcycle (c) Corporation's motorcycle (d) Rental motorcycle		√		
47.	<b>Among the offices mentioned below, in which office should one pay vehicular tax?</b> (a) Internal Revenue Office (b) Custom Office (c) Transport Management Office (d) Excise Duty Office			√	
48.	<b>What should be done if embossed number plate doesn't work ?</b> (a) To change it as one likes (b) To change after submitting an application at Transport Management Office (c) To change after repairing (d) All of the above		√		
49.	<b>What kind of vehicle is it if it has ma 1 ng ?</b> (a) Private car (b) Taxi (c) Tempo (d) Corporation's jeep				√
50.	<b>What is it called if the vehicle is registered in two or more than two person's name?</b> (a) Vehicle registration (b) Joint vehicle registration (c) Vehicle buying or selling (d) Vehicle ownership		√		
51.	<b>What is the colour of Bluebook?</b> (a) Black (b) Red (c) Blue (d) Yellow.			√	
52.	<b>Which are the emergency vehicles?</b> (a) Fire brigade (b) Ambulance (c) Hearse van (d) All of the above				√
53.	<b>Which vehicle is used to douse the fire ?</b> (a) Fire brigade (b) Ambulance (c) Hearse van (d) Taxi	√			
54.	<b>In ability to differentiate which of the following color disqualifies a person from getting driving license?</b> (a) Red. (b) White. (c) Black. (d) Blue.	√			
55.	<b>What is embossed number plate?</b> (a) Number plate written with Enamel (b) Number plate written with etched/ brocaded /carved letter (c) Number plate written with raised letters (d) All of the above			√	



Government of Nepal

Ministry of Physical Infrastructure and Transport

## Collection of objective questions of written exams for driving licence of category B (Car, Jeep, Delivery Van)

56.	<b>What is First Aid?</b> (a) Taking the patient to hospital immediately. (b) Bandaging in ordinary injuries (c) Calling the doctor if he/she isn't present (d) All of the above		√		
57.	<b>Which vehicle is registered in the largest number in Nepal?</b> (a) Car (b) Bus (c) Motorcycle (d) E-rickshaw			√	
58.	<b>Among the given vehicles, which one should not be registered?</b> (a) Electric cycle (b) Electric cycle with pedal (c) Electric scooter (d) Electric motorcycle		√		
59.	<b>What happens if one changes the colour of vehicle with his/her own desire?</b> (a) Looks good (b) Looks clean (c) Grows Expenses (d) Deserves fine				√
60.	<b>Which vehicle is used to carry patients/sick people to hospital ?</b> (a) Fire brigade (b) Ambulance (c) Hearse van (d) Taxi		√		
61.	<b>What does a vehicle with a green number plate indicate?</b> (a) Private Vehicle (b) Government vehicle (c) Corporate vehicle (d) Tourist vehicle				√
62.	<b>Why is driving license necessary ?</b> (a) To drive vehicle (b) To buy vehicle (c) To sell vehicle (d) None of them.	√			
63.	<b>What is vehicle registration certificate/blue book?</b> (a) Certificate with complete description of vehicle. (b) License to drive vehicle (c) Certificate with permission to drive vehicle (d) None of them		√		
64.	<b>Which vehicle has black number plate ?</b> (a) Government vehicle (b) Public vehicle (c) Corporation vehicle (d) Tourist vehicle		√		
65.	<b>With what documents should one submit application to the office if the driving license is lost ?</b> (a) Application and fee with traffic police recommendation letter (b) Recommendation from municipal ward office (c) Recommendation letter from District Administration Office	√			





Government of Nepal

Ministry of Physical Infrastructure and Transport

## Collection of objective questions of written exams for driving licence of category B (Car, Jeep, Delivery Van)

	(d) All of the above				
66.	<b>Among the following options, which condition is considered as disqualification to get the driving license?</b> (a) Visual impairment (b) Night blindness (c) Having weak legs & hands (d) All of the above				√
67.	<b>Which office doesn't work for the renewal of license ?</b> (a) Traffic Police Office (b) Vehicle Fitness Test Center (c) Department of Transport Management (d) All of the above				√
68.	<b>Which office issues the license certificate before permitting the public vehicle to move on road?</b> (a) District Administration Office. (b) Traffic Police Office. (c) Transport Management Office (d) All of the above			√	
69.	<b>Which vehicle isn't allowed to operate without route permit?</b> (a) Private vehicle (b) Government Vehicle (c) Public vehicle (d) Diplomatic vehicle			√	
70.	<b>Which office has the right to change the permissible speed limit confirmed for vehicle ?</b> (a) Traffic Police Office (b) Transport Management Office (c) Department of Transport Management (d) All of the above			√	
71.	<b>What should be done before driving out of order vehicle?</b> (a) Repair. (b) Fillup engine. (c) Nothing to be done. (d) Show the police.	√			
72.	<b>Who is the chairperson of Transportation Management Committee?</b> (a) Chief of Transport Management Office (b) District Police Chief (c) Chief of Traffic Police Office (d) Non of them				√
73.	<b>How should one drive the vehicle along the three- lane road?</b> (a) From both sides (b) From three sides (c) From one side (d) None of them				√
74.	<b>How would you start your four wheelers?</b> (a) By checking gear (b) By jamming on brake (c) By checking oil (d) By checking engine	√			
75.	<b>Which vehicle either small or big should give the side first ?</b>			√	



Government of Nepal

Ministry of Physical Infrastructure and Transport

## Collection of objective questions of written exams for driving licence of category B (Car, Jeep, Delivery Van)

	(a) The vehicle coming straightly (b) Small vehicle (c) Big vehicle (d) All of the above				
76.	<b>Why should one change gear ?</b> (a) Increase speed (b) Decrease speed (c) Blow horn (d) Both a & b				√
77.	<b>In what condition can one not get the copy of driving license?</b> (a) Having lost the license (b) Having torn (c) Having old & torn (d) Having the original with him/herself				√
78.	<b>Which signal should one give while moving ahead after starting vehicle?</b> (a) By turning on headlight (b) By turning on right side light (c) By turning on left side light (d) By turning on emergency light		√		
79.	<b>In which place should one lower the speed of vehicle?</b> (a) School area (b) Cross roads (c) Densely populated area (d) All of them				√
80.	<b>Which one isn't among the heavy equipment?</b> (a) Dozer (b) Mini bus (c) Loader (d) Mobile crane		√		
81.	<b>When was the first vehicle brought in Nepal ?</b> (a) B.S. 1996 (b) B.S. 2021 (c) B.S. 2000 (d) B.S. 2049	√			
82.	<b>What is the colour of foglight ?</b> (a) Red (b) Yellow (c) Green (d) Blue		√		
83.	<b>Why is the spelling of ambulance written as mirror image format?</b> (a) So that it could be read rightly from the looking glass of the vehicle ahead (b) As it is the convention (c) To show the difference from others (d) None of the above	√			
84.	<b>What does the blue number plate in a vehicle indicate?</b> (a) Diplomatic vehicle (b) Government vehicle (c) Private vehicle (d) vehicle of Corporation	√			
85.	<b>Which certificate is first needed to a Nepali citizen to obtain driving license ?</b> (a) Certificate given by driving school (b) Health Certificate (c) Nepali citizen certificate (d) Educational qualification certificate				√
86.	<b>What is the process followed to re-register a vehicle in another Transport Management Office?</b>	√			



Government of Nepal

Ministry of Physical Infrastructure and Transport

## Collection of objective questions of written exams for driving licence of category B (Car, Jeep, Delivery Van)

	(a) Transfer registration (b) Renewal. (c) Re-registration. (d) Inter-zonal registration				
87.	<b>Whose duty is it to operate the exam of driving license dignified?</b> (a) Transport Management Office (b) Examinees (c) Traffic Police's (d) All of the above				√
88.	<b>What time is known as peak hour ?</b> (a) Morning time. (b) Evening time. (c) One hour before and after the office opens and closes (d) Breakfast/Lunch hour			√	
89.	<b>For which vehicle third party insurance is mandatory?</b> (a) Rental bus, truck (b) Motorcycle (c) Private Car (d) All of the above				√
90.	<b>Who is the chairperson of driving license examination committee ?</b> (a) Chief of Transport Management Office (b) Chief of Department of Transport Management (c) Chief of Traffic Police Office (d) Chief of Driving School	√			
91.	<b>What do you mean by third party insurance ?</b> (a) Passenger's insurance (b) Pedestrian's insurance. (c) Vehicle's Insurance (d) Driver's insurance		√		
92.	<b>Which office's vehicle has yellow number plate?</b> (a) Government vehicle. (b) Private vehicle. (c) Public vehicle. (d) Corporation vehicle.				√
93.	<b>From which side one should alight after the vehicle stops ?</b> (a) Left side. (b) Right side. (d) Back side. (d) Front side.	√			
94.	<b>In what condition can one obtain the duplicate copy of driving license?</b> (a) Having lost. (b) Having torn. (c) Having stolen. (d) All of the above				√
95.	<b>What would you do when you find someone's driving license ?</b> (a) Tearing and throwing (b) Bring it to home. (c) Submit it to the traffic police. (d) Ignore it.			√	
96.	<b>Which vehicle doesn't need route permit?</b> (a) Motorcycle. (b) Public truck. (c) Public jeep. (d) Public bus.	√			
97.	<b>Which office is primarily responsible to manage movement of vehicles?</b>				√



Government of Nepal

Ministry of Physical Infrastructure and Transport

## Collection of objective questions of written exams for driving licence of category B (Car, Jeep, Delivery Van)

	(a) District Administration Office . (b) Transport Management Office (c) District Police Office (d) Traffic Police Office.				
98.	<b>What educational qualification is needed for driving license ?</b> (a) SLC/SEE (b) Plus 2 or equivalent. (c) Higher Education. (d) Literate				√
99.	<b>When was Department of Transport established?</b> (a) V.S. 2051 (b) V.S. 2041 (c) V.S. 2052 (d) V.S. 2042		√		
100.	<b>What is given more consideration while driving during rain ?</b> (a) Brake (b) Skidding (c) Caution to spread mud (d) All of the above				√
101.	<b>What kind of vehicle's ownership shouldn't be transfered ?</b> (a) Those which crossed 20 years by production year. (b) Those which crossed 15 years by production year. (c) Those which crossed 5 years by production year. (d) Those which crossed 25 years by production year.	√			
102.	<b>What should be done if the auctioned vehicle is to be auctioned once again ?</b> (a) Auctioned again. (b) Use it without registration. (c) Scrapped as per the law. (d) Register for auction as per the rule.			√	
103.	<b>After how many hours should a long route public vehicle take a break ?</b> (a) Every three hours. (b) Every four hours. (c) Every two hours (d) Every One hour		√		
104.	<b>Which office renews the driving license ?</b> (a) Transportation Management office. (b) Department of Transport Management (c) Vehicle Fitness Test Center (d) Traffic Police Office.	√			
105.	<b>On what kind of road should we not drive the public vehicle ?</b> (a) Not pitched. (b) Gravel road. (c) Route not allowed. (d) Hilly road.			√	
106.	<b>What kind of vehicle wouldn't have the provision of vehicular tax ?</b> (a) Government vehicle. (b) Corporation vehicle (c) Diplomatic vehicle. (d) Applies to all			√	
107.	<b>What would you do if engine block of vehicle breaks ?</b> (a) To get it changed at workshop. (b) To get it changed after you get permission from Transportation Management Office.		√		



Government of Nepal

Ministry of Physical Infrastructure and Transport

## Collection of objective questions of written exams for driving licence of category B (Car, Jeep, Delivery Van)

	(c) To insert old vehicle's engine block (d) To get it changed at market immediately when it breaks.				
108.	<b>What is it called to transform foreign driving license into Nepal ?</b> (a) Internationalization. (b) Foreignization. (c) Transforming into Nepali (Nepalization). (d) Nationalization			√	
109.	<b>What kind of test/trial examination should be taken to transform foreign driving license into Nepali ?</b> (a) Written. (b) Oral. (c) practical. (d) None of them.				√
110.	<b>What provision is in Nepal about international/ foreign driving license?</b> (a) Remain invalid instantly. (b) Permission to drive accross Nepal. (c) Permission to drive only in Kathmandu valley. (d) None of them.		√		
111.	<b>What kind of driving license's record/data is deleted ?</b> (a) If not renewed till five years after renewal time is finished. (b) Having old license. (c) The driving license of those who had done accident. (d) All of the above	√			
112.	<b>When should one go to the office for biometrics after filling the application form for driving licence?</b> (a) Next day. (b) Within one year. (c) Within three monts. (d) Visit date given by the system.				√
113.	<b>Which type of road is upto 25 KM long ?</b> (a) Long road. (b) Short road. (c) Local road. (d) Midium size road.			√	
114.	<b>Among the given vehicles, which one shoudn't take the route permit?</b> (a) Ambulance. (b) Fire brigade. (c) Motorcycle. (d) All of the above				√
115.	<b>For what kind of vehicle can the authorized officer renew for upto five years ?</b> (a) Government. (b) Corporation & diplomatic (c) Private (d) All of the above			√	
116.	<b>What kind of vehicle is fire brigade ?</b> (a) Passenger carrier (b) Goods carriers (c) Hearse Van. (d) Fire controller.				√
117.	<b>What happens if one keeps on pressing on the accelerator ?</b>			√	



Government of Nepal

Ministry of Physical Infrastructure and Transport

## Collection of objective questions of written exams for driving licence of category B (Car, Jeep, Delivery Van)

	(a) Vehicle doesn't work. (b) Traffic police charges fine. (c) Vehicle speeds up. (d) All of the above				
118.	<b>Which entity do the transportation management offices come under?</b> (a) Department of Transport Management (b) Provincial Ministry for Physical Infrastructure Development (c) Ministry for Physical Infrastructure & Transportation (d) None of the above		√		
119.	<b>In what condition do the vehicles maintain wide distance between each other while driving ?</b> (a) During the time of visit of distinguished personalities. (b) During sunshine (c) When its not raining (d) During foggy/misty time				√
120.	<b>What shouldn't be done while driving ?</b> (a) To talk on mobile (b) To use alcoholic drink (c) To overtake randomly (d) All of the above				√
121.	<b>How should we cross the road ?</b> (a) Stopping while walking (b) Running (c) Slowly through zebra crossing (d) Walking smoothly			√	
122.	<b>Among the options given below, which one is the duty of the driver ?</b> (a) To collect travelling fare (b) To drive vehicle after checking the condition. (c) To clean the road (d) All of the above		√		
123.	<b>What should be done while driving in the urban area ?</b> (a) Limit the speed. (b) Increase the speed. (c) Stop the vehicle. (d) None of them	√			
124.	<b>What is mandatory while driving ?</b> (a) To use seat belt (b) To put on glasses (c) To put on jacket. (d) All of the above	√			
125.	<b>What do you understand by vehicle safely?</b> (a) To park on the road (b) To stop the vehicle at neutral gear. (c) To lock the vehicle. (d) To park the vehicle on downward road.			√	
126.	<b>How would the vehicle's brake fail ?</b> (a) When the brake heats (b) When the brake pipe breaks. (c) When there is no brake oil. (d) All of the above				√
127.	<b>What happens to those who blow the pressure horns ?</b>		√		



Government of Nepal

Ministry of Physical Infrastructure and Transport

## Collection of objective questions of written exams for driving licence of category B (Car, Jeep, Delivery Van)

	(a) Imprisonment (b) Fine. (c) Confiscation of the vehicle. (d) Nothing happens				
128.	<b>What do the marks in the middle of road indicate ?</b> (a) Not to race. (b) To divide the road lane. (c) Not to cross the road. (d) Not to overtake.		√		
129.	<b>Where should the bluebook be kept ?</b> (a) At home . (b) With drivers (c) At office. (d) All of the above		√		
130.	<b>When are the side lights turned on ?</b> (a) While changing lane. (b) While overtaking. (c) While parking the vehicle. (d) Both a & b				√



Government of Nepal

Ministry of Physical Infrastructure and Transport

## Collection of objective questions of written exams for driving licence of category B (Car, Jeep, Delivery Van)

### 2. Knowledge related to vehicular act/regulation

Q.N.	Question	Correct Answer			
		a	b	c	d
131.	<b>Within how much time does one have to inform once the driving licence is lost ?</b> (a) Seven days. (b) Fifteen days. (c) One month. (d) Two months.	√			
132.	<b>Upto how much time does one not have to pay the fine to renew the driving license once the validity period is finished?</b> (a) One month (b) Three months (d) Five months (d) Seven months		√		
133.	<b>How old should one be to be eligible to get car/jeep driving license ?</b> (a) Sixteen years. (b) Seventeen years. (c) Eighteen years. (d) Twenty years.			√	
134.	<b>What is the maximum no. of violations of traffic rules beyond which driving license shall be suspended?</b> (a) Three times. (b) Four times. (c) Five times. (d) Six times.			√	
135.	<b>After how many years can one obtain the driving license for large vehicle once he/she has obtained the driving license for car/jeep ?</b> (a) One year. (b) Two years. (c) Three years. (d) Four years.		√		
136.	<b>Which office does the work of changing ownership of vehicle ?</b> (a) Traffic Police Office. (b) District Police Office. (c) Transport Management Office. (d) None of them.			√	
137.	<b>What is the fee of renewing the driving license of medium vehicle ?</b> (a) 1500. (b) 2000. (c) 2500 (d) 3000			√	
138.	<b>In how many years does one have to renew the driving license ?</b> (a) 5-5 years. (b) 3-3 Years. (c) 2-2 Years. (d) 7-7 Years.	√			
139.	<b>How much does one have to pay as fee to obtain jeep driving license ?</b> (a) 1 thousand. (b) 7 hundred. (c) 2 thousand. (d) 15 hundred.			√	
140.	<b>Within how much time does one have to inform the office if the driver changes his/her address ?</b> (a) 7 days (b) 15 days. (c) 1 month. (d) 45 days.			√	
141.	<b>How many seats are reserved for female in public vehicle ?</b>	√			





Government of Nepal

Ministry of Physical Infrastructure and Transport

## Collection of objective questions of written exams for driving licence of category B (Car, Jeep, Delivery Van)

Q.N.	Question	Correct Answer			
		a	b	c	d
	(a) Two seats (b) Three seats. (c) Six seats. (d) Five seats.				
142.	<b>Within how much time does one not have to pay fine to renew the bluebook once its date is expired ?</b> (a) 1 month. (b) 2 months. (c) 3 months. (d) 4 months.			√	
143.	<b>After how many hours does the driver of long distance public vehicle have to change his shift?</b> (a) 4 hours. (b) 6 hours. (c) 8 hours. (d) As per the needs.		√		
144.	<b>What punishment has been provisioned in law for the driver if he/she drives the vehicle with intention to kill person and the person dies?</b> (a) No punishment (b) Life imprisonment with forfeiture (c) Life imprisonment. (d) 20 years imprisonment.		√		
145.	<b>After how much time does the bluebook becomes invalid if it isn't timely renewed ?</b> (a) 1 year. (b) 3 years, (c) 5 years. (d) 7 years.			√	
146.	<b>How much fee does one have to pay if he/she adds large vehicle in category of his/her driving license?</b> (a) 5 hundred. (b) 1 thousand. (c) 1 thousand 5 hundred. (d) 2 Thousand	√			
147.	<b>How much fee does one have to pay to fill up the application for driving license ?</b> (a) Rs. 100 (b) Rs. 500 (C) Rs 300 (d) Rs. 400		√		
148.	<b>How many years old public vehicles aren't allowed to be operated?</b> (a) 10 Years (b) 15 years. (c) 20 years. (d) 25 years.			√	
149.	<b>How much does one have to pay to renew the license for motorcycle ?</b> (a)1500. (b) 2000. (c) 2500 (d) 3000	√			
150.	<b>What amount has been provisioned for third party insurance ?</b> (a) 2 Lakh. (b) 3 Lakh. (c) 4 Lakh. (d) 5 Lakh.				√
151.	<b>After how many hours do the long distance public vehicles have to take break on the road ?</b> (a) Every three hours. (b) Every four hours. (c) Every two hours.(d) None of them				√
152.	<b>What is the validity period of driving license ?</b>			√	



Government of Nepal

Ministry of Physical Infrastructure and Transport

## Collection of objective questions of written exams for driving licence of category B (Car, Jeep, Delivery Van)

Q.N.	Question	Correct Answer			
		a	b	c	d
	(a) One year. (b) Three years. (c) Five years. (d) Ten years.				
153.	<b>How many seats are reserved for physically disabled people in large public vehicle that run along local road ?</b> (a) Two seats. (b) Three seats. (c) Four seats. (d) Five seats.	√			
154.	<b>How long can a driving license be suspended?</b> (a) Three months. (b) Five months. (c) Six months. (d) Eight months.			√	
155.	<b>How much does one have to pay to renew the driving license for large vehicles ?</b> (a) 1500 (b) 2000. (c) 2500. (d) Not of them				√
156.	<b>After how much time from the expiry date does one have to pay fine to renew the driving licence?</b> (a) One month. (b) Three months. (c) Five months. (d) Seven months.		√		
157.	<b>How much rupee ticket has to be pasted on the application form for the route permit &amp; change of ownership ?</b> (a) Five rupees. (b) Ten rupees. (c) Two rupees. (d) One rupee.		√		
158.	<b>Within how much time does one have to submit the application for the copy of driving license if it is lost or spoiled?</b> (a) 3 days. (b) 7 days. (c) 15 days. (d) 30 days.			√	
159.	<b>What provision of punishment has been made if the vehicle without pollution pass sticker enters the prohibited area?</b> (a) Imprisonment (b) Confiscation of vehicle (c) Restriction to drive in future. (d) Fine for the driver.				√
160.	<b>How much additional fine does one have to pay for the renewal of driving license after one year of the due renewal date?</b> (a) 150 percent. (b) 50 percent. (c) 30 percent. (d) 100 percent.				√
161.	<b>As per the Vehicle and Transport Management Act, what age one must have reached for obtaining the license for large vehicle?</b> (a) 16 years. (b) 18 years. (c) 21 years. (d) 25 years.			√	
162.	<b>How often is the pollution of private vehicle tested?</b>		√		



Government of Nepal

Ministry of Physical Infrastructure and Transport

## Collection of objective questions of written exams for driving licence of category B (Car, Jeep, Delivery Van)

Q.N.	Question	Correct Answer			
		a	b	c	d
	(a) Every 3 months (b) Every six months. (c) Every 1 year. (d) Every 2 years				
163.	<b>Within how much time does one have to register his/her vehicle after he/she clarifies the custom dues ?</b> (a) Ten days. (b) Fifteen days. (c) Twenty days. (d) Twentyfive days		√		
164.	<b>What is the limitation of weight of large vehicle ?</b> (a) More than 10 ton. (b) From 4 ton to 10 ton. (c) Less than 4 ton. (d) 1 ton.	√			
165.	<b>What is the limitation of weight of medium size vehicle</b> (a) 10 ton. (b) From 1 ton to 4 ton. (c) For 4 ton to 10 ton. (d) 1 ton.			√	
166.	<b>What is the limitation of weight of small size vehicle ?</b> (a) 10 ton (b) Less than 4 ton. (c) Less than 1 ton. (d) 1 ton.		√		
167.	<b>When was Vehicle &amp; Transport Management Act enacted?</b> (a) V.S 2048. (b) V.S. 2049. (c) V.S. 2054. (d) V.S. 2050		√		
168.	<b>Which is the vehicular pollution standard prevailing in Nepal?</b> (a) Nepal Vehicle Mass Emmision Standard, 2056, (b) Nepal Vehicle Mass Emmision Standard, 2060, (c) Nepal Vehicle Mass Emmision Standard, 2065, (d)) Nepal Vehicle Mass Emmision Standard, 2069				√
169.	<b>How often does one have to renew bluebook?</b> (a) Every 6 months. (b) Every 1 year. (c) Every 2 years. (d) Every 4 years.		√		
170.	<b>Upto how many years can one renew his/her driving license by paying fine once it is expired?</b> (a) 5 Years (b) 3 years. (c) 2 years (d) 7 years	√			
171.	<b>Within how much time does one have to pay license fee after he/she has passed the trial for driving license?</b> (a) 18 months (b) 5 years (c) 15 days (d) 90 days	√			
172.	<b>How much fee does one have to pay for the duplicate copy of driving license?</b> (a) Two hundred (b) Five hundred (c) One thousand (d) One thousand five hundred		√		



Government of Nepal

Ministry of Physical Infrastructure and Transport

## Collection of objective questions of written exams for driving licence of category B (Car, Jeep, Delivery Van)

Q.N.	Question	Correct Answer			
		a	b	c	d
173.	<b>What is/are the condition(s) in which driving license can be invalid?</b> (A) If proved disqualified as per the act. (b) If the driver dies. (C) If the person wants to cancel it voluntarily (d) All of the above				√
174.	<b>Upto how much time is one who has misconducted in the written exam of driving license not allowed to enroll in such exam?</b> (a) 1 year. (b) 2 months. (c) 3 months. (d) None of them			√	
175.	<b>What is the maximum time upto which a temporary vehicle registration certificate remain valid?</b> (a) 1 month. (b) 3 months. (c) 6 months (d) 1 year				√
176.	<b>What is the road covers more than 250 kilometer distance called ?</b> (a) Long road. (b) Local road. (c) Short road. (d) None of them.	√			
177.	<b>For driving which vehicle is 21 years (or more) old person eligible ?</b> (a) Small. (b) Medium. (c) Large. (d) All of the above				√
178.	<b>How much fine has been provisioned if one drives without getting driving license?</b> (a) Rs. 200 to 500. (b) Only rs. 400 (c) Rs. 500 to 2000. (d) Upto rs.100.			√	
179.	<b>How long does the probation period of driving license?</b> (a) 6 months. (b) 1 year. (c) 3 months. (d) 18 months.		√		
180.	<b>How much time is added to validity period in driving license if a category is added.</b> (a) 5 years. (b) 3 months (c) not increase (d) 18 months.			√	
181.	<b>Upto how long time in maximum has the temporary route permit been provisioned ?</b> (a) 14 days. (b) 7 days. (c) 5 days. (d) One month.		√		
182.	<b>How long does route permit remain valid once it is taken ?</b> (a) 4 months. (b) 6 months. (c) 3 months. (d) 1 year.	√			
183.	<b>Within how many days does one have to renew route permit once it is expired?</b> (a) 4 days. (b) 6 days. (c) 15 days. (d) 1 year.			√	



Government of Nepal

Ministry of Physical Infrastructure and Transport

## Collection of objective questions of written exams for driving licence of category B (Car, Jeep, Delivery Van)

Q.N.	Question	Correct Answer			
		a	b	c	d
184.	<b>What percent extra fee does one have to pay to renew route permit for one month after it is expired?</b> (a) 50 percent. (b) 25 percent. (c) 100 percent. (d) No additional charge			√	
185.	<b>Within how many days does one have to take route permit after its fitness test?</b> (a) 45 days. (b) 60 days. (c) 90 days. (d) None of them				√
186.	<b>As per new procedure, what minimum percent marks does one have to obtain to pass the written exam for driving license?</b> (a) 50 percent. (b) 60 percent. (c) 80 percent. (d) 70 percent.			√	
187.	<b>What punishment is provisioned to those who hijack a moving vehicle and changes its course?</b> (a) Imprisonment or fine .(b) Confiscation of vehicle. (c) bamishing from nation (d) All of them.	√			
188.	<b>Within how many days does one have to return his/her cancelled driving license to the competent authority?</b> (a) 7 days. (b) 14 days. (c) 35 days. (d) 15 days	√			
189.	<b>What punishment is provisioned if one drives vehicle changing number plate?</b> (A) 6 months imprisonment. (b) 5 to 15 thousand fine. (c) Confiscation of vehicle. (d) All of the above				√
190.	<b>How much insurance amount has been provisioned for public vehicle driver and other employees?</b> (a) Rs. 500,000. (b) Rs. 200,000. (c) Rs. 3,00,000. (d) Rs. 600,000	√			
191.	<b>What is the maximum length of local road?</b> (a) Upto 150 kilometers. (b) Up to 50 kilometers (c) Upto 25 kilometers (d) Longer than 250 kilometers			√	
192.	<b>What is the percentage concession of fare provisioned for senior citizens in public vehicle?</b> (a) 5 percent. (b) 50 percent. (c) 15 percent. (d) 20 percent.		√		
193.	<b>After how many years of production, shall a vehicle be not registered as public or other types of vehicle?</b>	√			



Government of Nepal

Ministry of Physical Infrastructure and Transport

## Collection of objective questions of written exams for driving licence of category B (Car, Jeep, Delivery Van)

Q.N.	Question	Correct Answer			
		a	b	c	d
	(a) 20 years. (b) 15 years. (c) 5 years . (d) 25 years.				
194.	<b>After how many years of expiry of registration can a vehicle be re-registered?</b> (a) 3 years. (b) 15 years. (c) 7 years. (d) 5 years.				√
195.	<b>Which of the following is considered as long distance road?</b> (a) Less than 100 KM road. (b) Longer than 250 KM road (c) Less than 25 KM road . (d) None of them.		√		
196.	<b>Which of the following is considered as medium distance road?</b> (a) Longer than 250 KM road (b) Road between 100 to 250 KM. (c) Less than 25 KM road . (d) Road between 25 to 100 KM .		√		
197.	<b>Which of the following is considered as short distance road?</b> (a) Longer than 250 KM road (b) Road between 100 to 250 KM. (c) ) Less than 25 KM road . (d) Road between 25 to 100 KM .				√
198.	<b>What is the maximum period for which foreign one time or cumulative validity period of temporary registration certificate?</b> (a) 4 months. (b) 6 months. (c) 14 months. (d) 5 years.		√		
199.	<b>What is the maximum period for foreign registered vehicle which can be permitted to operate in Nepal?</b> (a) 1 month. (b) 1 year (c) 5 years (d) Not allowed	√			
200.	<b>How much does one have to pay to change the ownership changing of a vehicle ?</b> (A) 50% amount of vehicle registration charge. (b) Rs. 5000. (c) whatever is needed for registration charge (d) Rs. 1500.	√			
201.	<b>If registration certificate is suspended, within how many days does one have to submit Vehicle Registration Certificate with the written order of authorized officer?</b> (a) 7 days. (b) 15 days. (c) 35 days. (d) 21 days	√			
202.	<b>Which of the following exams is not required for an applicant to add category in the driving license?</b> (a) Written. (b) Practical. (c) Both of them (d) None of them	√			
203.	<b>What is the minimum marks required to pass the practical exams of driving license of Category B?</b>			√	



Government of Nepal

Ministry of Physical Infrastructure and Transport

## Collection of objective questions of written exams for driving licence of category B (Car, Jeep, Delivery Van)

Q.N.	Question	Correct Answer			
		a	b	c	d
	(a) 50 percent. (b) 60 percent. (c) 70 percent. (d) 80 percent.				
204.	<b>What will happen if an examinee touches the boundary line making U-turn in the practical exam for driving license of Category B (car / jeep / delivery van)?</b> (a) 10 marks decreases. (b) 15 marks decreases (c) Declares failure(d) Nothing happens.	√			
205.	<b>What is the marks that one can secure upon successful completion of 8 (eight) formation for driving license of Category B?</b> (a) 10 marks (b) 20 marks (c) 15 marks (d) 25 marks		√		
206.	<b>What is the permissible number of engine stoppage in trial exam of category B?</b> (a) 1 time. (b) 2 times. (c) 3 times. (d) 4 times	√			
207.	<b>How much marks is deducted if the examinee starts driving without using seatbelt in the trial exam for the driving license of Catagory B (car / jeep / delivery van)?</b> (a) 2 marks . (b) 4 marks. (c) No mark decreases (d) Declared unqualified		√		
208.	<b>What is the width of garage track in the garage parking section exam of trial exam of driving license of Catagory B (Car / Jeep / Delivery Van) ?</b> (a) 2 meter (b) 3 meter (c) 4 meter (d) 5 meter		√		
209.	<b>How much marks is deducted if the examinee doesn't follow traffic signal in the trial exam for driving license of Catagory B (car / jeep / delivery van) driver's license?</b> (a) 10 marks. (b) 15 marks. (c) 20 marks. (d) No mark decreases		√		
210.	<b>What is the length of test track used for speed breaker (ramp test) in the practical exam for driving license of B Catagory (car / jeep / delivery van)?</b> (A) 12 meter. (b) 14 meter. (c) 16 meter. (d) 20 meter.			√	
211.	<b>Within what duration of passing the written exam, can one appear in trial exam?</b> (a) Upto 6 months. (b) Upto 9 months. (c) Upto 12 months. (d) Upto 18 months				√



Government of Nepal

Ministry of Physical Infrastructure and Transport

## Collection of objective questions of written exams for driving licence of category B (Car, Jeep, Delivery Van)

Q.N.	Question	Correct Answer			
		a	b	c	d
212.	<b>For how many times can one appear in trial exam once he/she the passes the written exam ?</b> (a) 1 time. (b) 2 times. (c) 3 times. (d) 4 times.			√	
213.	<b>What is understood by public place, as per Vehicle and Transport Management Act?</b> (a) Bridge. (b) Road. (c) Footpath (d) All of the above				√
214.	<b>What is the time duration by which a private vehicle owner has to pay vehicular tax?</b> (a) End of Ashar (b) End of Chitra (c) Endo of Ashwin (d) Within 3 months after the date ends				√
215.	<b>Within how many days does one have to return the cancelled driving license?</b> (a) Within ten days. (b) Within fifteen days. (c) Within thirty days. (d) None of them		√		
216.	<b>Which of the following categories is the tourist vehicle equivalent to?</b> (a) Public vehicle (b) Private vehicle (c) Government vehicle. (d) Diplomatic vehicles.	√			
217.	<b>What is the specified seating capacity of a mini bus?</b> (a) 15 to 25 including driver. (b) 12 to 20 including driver. (c) 10 to 22 including driver. (d) 24 including driver .	√			
218.	<b>What is the age limit after which one cannot acquire driving license for large and medium size public vehicle?</b> (a) 55 years. (b) 50 years. (c) 60 years. (d) 45 years.			√	
219.	<b>What is the fee applicable for fitness test certificate of medium and small vehicle at VFTC (Vehicle Fitness Test Center)?</b> (a) Rs. 200 (b) Rs. 400 (c) Rs. 450 (d) Rs. 300	√			
220.	<b>According to the Vehicle Act, what do you mean by driver?</b> (A) One who drives vehicle (b) One who has got the driving license (c) One who works at transportation professional company . (d) One who works at organatzation and institutions.		√		





Government of Nepal

Ministry of Physical Infrastructure and Transport

## Collection of objective questions of written exams for driving licence of category B (Car, Jeep, Delivery Van)

### 3. Technical or mechanical knowledge of vehicle

Q.N.	Question	Correct Answer			
		a	b	c	d
221.	<b>Whose duty is it to confirm the condition of vehicle before driving it?</b> (a) Traffic Police's (b) Mechanical Engineer's (c) Driver's (d) Transportation Management Office's			√	
222.	<b>What should be done to stop the vehicle immediately?</b> (a) Use brakes safely (b) Blow horn (c) Ask the traffic police (d) None of the above	√			
223.	<b>From where can water leak into engine?</b> (a) From silencer pipe (b) From gauge pipe that checks engine oil (c) From air cleaner (d) All of the above			√	
224.	<b>What is the function of a speedometer?</b> (a) Measure the speed of the vehicle (b) Measure the temperature of vehicle. (c) Measure the fuel in vehicle (d) All of the above.	√			
225.	<b>In what condition does brake light glow?</b> (a) While changing gears. (b) While pressing accelerator (c) While using foot brake. (d) While blowing horn.			√	
226.	<b>What is the function of a spark plug?</b> (a) To ignite the mixture of air & fuel in engine. (b) To provide the quantity of water to engine. (c) To provide mobil to engine (d) None of the above	√			
227.	<b>What kind of vehicle is understood as 'four wheel drive' vehicle?</b> (a) The vehicle that has brakes on all four wheels (b) The vehicle with engine power on all four wheels (c) The vehicle used for short distance. (d) All of the above		√		
228.	<b>Which of the following source powers the horn?</b> (a) Electricity (b) Air pressure (c) Brake (d) Both a and b				√
229.	<b>What makes the parts of engine oily?</b> (a) Distilled water (b) Acid (c) Mobil (d) Mineral water			√	



Government of Nepal

Ministry of Physical Infrastructure and Transport

## Collection of objective questions of written exams for driving licence of category B (Car, Jeep, Delivery Van)

Q.N.	Question	Correct Answer			
		a	b	c	d
230.	<b>What is the name of device that adds the quantity of air &amp; fuel in carburetor?</b> (a) Spark plug (b) Clutch (c) Battery (d) Throttle				√
231.	<b>What does a master cylinder do?</b> (a) Helps the vehicle run. (b) Helps the vehicle go up. (c) Helps the vehicle go back (d) Helps the vehicle stop.				√
232.	<b>Which of the following engines has a carburetor?</b> (a) Petrol engine. (b) Diesel engine (c) Electric engine. (d) All of the above	√			
233.	<b>What are the two devices that increase the speed of a vehicle?</b> (a) Brakes and accelerators. (b) Accelerators and steering (c) Gear and accelerator. (d) Fan belt and accelerator.			√	
234.	<b>What should be done if there is red light in oil pressure meter situated in dashboard?</b> (a) One should start engine. (b) One should stop engine. (c) One should use brake. (d) One should blow horn.		√		
235.	<b>What's kept in radiator?</b> (a) Petrol (b) Diesel (c) Water (d) Acid			√	
236.	<b>In which gear should you start the engine?</b> (a) First gear (b) Second gear (c) Third gear (d) Neutral				√
237.	<b>What should one do when vehicle emits black smoke while starting?</b> (a) Close the silencer pipe. (b) Remove the silencer pipe (c) Take the vehicle to workshop to repair engine (d) Ignore it			√	
238.	<b>What is the name of the meter that measures the power of the battery?</b> (a) Lactometer (b) Speedometer (c) Hydrometer (d) Ampere meter				√
239.	<b>What should be done while reversing the vehicle?</b> (a) Stop the vehicle. (b) Use the reverse gear (c) Slowly back the vehicle using looking glass. (d) All of the above				√
240.	<b>What is the function of a clutch?</b> (a) Increase speed (b) Decrease speed (c) Free engine from gear (d) Stop the vehicle			√	
241.	<b>What is consumed while using A/C in a vehicle?</b>			√	



Government of Nepal

Ministry of Physical Infrastructure and Transport

## Collection of objective questions of written exams for driving licence of category B (Car, Jeep, Delivery Van)

Q.N.	Question	Correct Answer			
		a	b	c	d
	(a) Power (b) Fuel (c) Both A and B (d) None of them				
242.	<b>What is the main function of the gear box?</b> (a) Only to run the vehicle speedly (b) Only to run the vehicle slowly (c) To maintain desired speed (d) Help the vehicle come across the ditch			√	
243.	<b>What is the function of brakes?</b> (a) Stop the vehicle. (b) Speed up the vehicle (c) To reverse the vehicle (d) To turn the vehicle	√			
244.	<b>What does the fuel meter indicate?</b> (a) Level of fuel (b) Level of water (c) Level of mobil (d) All of the above	√			
245.	<b>What should be done to save the vehicle's tyres?</b> (a) Drive at top gear (b) To drive using less air (c) Maintain the air pressure (d) None of the above			√	
246.	<b>What might happen if the vehicle's engine heats up too much?</b> (a) The engine might wind up (rotate) more (b) The engine might get electric shock (c) The engine might cease (d) Nothing happens			√	
247.	<b>What is the function of carburetor?</b> (a) To cool the engine. (b) To heat up engine (c) To help increase or decrease engine's speed. (d) To mix up air & fuel as needed.				√
248.	<b>What should driver not check before driving?</b> (a) Lights (b) Air in Wheels (c) Color of vehicle (d) Brake			√	
249.	<b>What should be done if gear oil drips continuously from differential?</b> (a) To add oil time and drive the vehicle (b) To repair it immediately (c) To keep on driving until sound comes (d) To keep on driving until engine heats up.		√		
250.	<b>What controls the vehicle's wheel?</b> (a) Engine (b) Brakes (c) Body (d) Battery		√		
251.	<b>When is reverse light turned on?</b> (a) While using brakes (b) While using hand brakes (c) While pressing the accelerator (d) While reversing the vehicle.				√
252.	<b>What is compressed in diesel engine's cylinder?</b>			√	



Government of Nepal

Ministry of Physical Infrastructure and Transport

## Collection of objective questions of written exams for driving licence of category B (Car, Jeep, Delivery Van)

Q.N.	Question	Correct Answer			
		a	b	c	d
	(a) Water (b) Fuel (c) Air (d) All of the above				
253.	<b>What should be checked if footbrake stops working properly all of a sudden?</b> (A) To check wheel's pressure (b) To check brake oil level (c) To check master cylinder (d) All of the above				√
254.	<b>What should be done if engine doesn't start in winter?</b> (a) Turn on A/C (b) add water in mobil (c) Add fuel. (d) start after using choke.				√
255.	<b>How does battery used in vehicle get charged?</b> (a) By vehicle mobil (b) By vehicle's radiator (c) By vehicle's dynamo (d) None of the above			√	
256.	<b>What is the function of dip stick?</b> (a) To check the level of mobil (b) To check the level of water (c) To maintain the level of oil. (d) None of the above	√			
257.	<b>What is the function of an accelerator ?</b> (a) To cool the engine (b) To close the oil. (C) To help provide oil on the basis of speed (d) To measure smoke			√	
258.	<b>What is the function of differential?</b> (a) Turn wheels with different speed. (b) To pump up air in wheels (c) To patch up puncture. (d) None of the above	√			
259.	<b>What is the main function of vehicle's axle?</b> (a) To bear the load of vehicle and help the wheel turn. (b) To only bear the load of the vehicle. (c) To use Engine (d) To use four wheels	√			
260.	<b>What is a wiper?</b> (a) Device to increase speed. (b) Device to stop vehicle. (c) Towel to wipe vehicle. (d) Device to clean the glass.				√
261.	<b>What is the name of machine that generates electricity in running engine?</b> (a) Storage Battery (b) Charging Dynamo (c) Drycell (d) Tournch light		√		
262.	<b>What do we call petrol engine in other words?</b>			√	



Government of Nepal

Ministry of Physical Infrastructure and Transport

## Collection of objective questions of written exams for driving licence of category B (Car, Jeep, Delivery Van)

Q.N.	Question	Correct Answer			
		a	b	c	d
	(a) Diesel engine (b) Hydraulic engine (c) Gasoline engine (d) All of the above				
263.	<b>In what condition using hand brake is considered dangerous?</b> (a) While moving upwards (b) While moving downwards (c) At the time of high speed. (d) In turnings			√	
264.	<b>Where does steering work?</b> (a) All the front wheels (b) At the back wheels (c) At gear (d) At engine	√			
265.	<b>Where does the brakes work on vehicle?</b> (a) At engine (b) At steering (c) At wheels (d) at gear			√	
266.	<b>On which systems are brakes based?</b> (a) Mechanical (b) Hydraulic system (c) Both a & b (d) None of them.		√		
267.	<b>What should be added if the level of water decreases in battery?</b> (a) Tap's water (b) Distilled water (c) Mineral water (d) Mustard oil		√		
268.	<b>When should choke lever be closed?</b> (a) After the engine stops. (b) Any time. (c) After the engine starts (d) All of the above			√	
269.	<b>What should be done if black smoke comes while driving?</b> (a) To add fuel (b) To repair engine (c) To close silencer pipe. (d) All of the above		√		
270.	<b>Among the options, which one is the device that measures the speed of the running vehicle?</b> (a) Hydrometer (b) Thermal meter (c) Hectometer (d) Speedometer				√
271.	<b>What saves the battery from being overcharged?</b> (a) Carburetor (b) Cut out (c) Air cooler (d) None of the above		√		
272.	<b>What is ignition switch related to?</b> (a) To engine and clutch. (b) To engine and gearbox (c) To engine and battery. (d) All of the above			√	
273.	<b>In which direction does the vehicle move if the front right wheel gets punctured while moving ?</b> (a) It doesn't turn (b) It turns to right (c) It turns to left (d) It stops		√		
274.	<b>Which oil is kept in the steering box?</b> (a) Brake oil (b) Mobil (c) Steering oil (d) Grease			√	



Government of Nepal

Ministry of Physical Infrastructure and Transport

## Collection of objective questions of written exams for driving licence of category B (Car, Jeep, Delivery Van)

Q.N.	Question	Correct Answer			
		a	b	c	d
275.	<b>What is the main source of electricity in the engine?</b> (a) Petrol. (b) Battery. (c) Mobil. (d) Diesel		√		
276.	<b>Among the options below which one doesn't help the engine stop?</b> (a) Running at lower speed. (b) If engine remains in right condition. (c) If fuel is consumed (d) None of the above				√
277.	<b>What is the minimum displacement volume of engine in four wheeler used in driving school?</b> (a) 796 c.c. (b) 798 c.c. (c) 797 c.c. (d) 795 c.c.	√			
278.	<b>How much electrical power has been specified for three wheeler electric vehicles for driving school?</b> (A) 1000 watts. (b) 800 watts. (c) 900 watts. (d) 700 watts	√			
279.	<b>What makes the wheels of vehicle turn?</b> (a) Radiator. (b) Gear. (c) Differential. (d) None of them			√	
280.	<b>Among the options, what isn't kept in the radiator?</b> (a) Petrol. (b) Diesel. (c) Acid. (d) All of the above				√
281.	<b>What increases/decreases the power of engine?</b> (a) Accelerator. (b) Brake. (c) Steering. (d) Clutch.	√			
282.	<b>What provides current to the vehicle's engine?</b> (a) Accelerator. (b) Clutch. (c) Steering. (d) Spark plug				√
283.	<b>What is the function of a dynamo?</b> (a) To supply current to engine. (b) To cool the water of radiator. (c) To charge the battery. (d) None of the above			√	
284.	<b>Among the options, what makes the vehicular parts oily?</b> (a) Grease. (b) Mobil (c) Steering oil. (d) All of the above				√
285.	<b>Among the options, what is used to measure the fuel?</b> (a) Speedometer (b) Thermometer (c) Telescope (d) None of the above				√
286.	<b>When are brakes not used?</b> (a) While increasing the speed. (b) While turning the vehicle (c) While reserving the vehicle. (d) While stoping the vehicle				√
287.	<b>What should be done before driving?</b> (a) To inspect the condition of the vehicle. (b) To inform the traffic (c) To inform to mechanical engineer. (d) All of the above	√			



Government of Nepal

Ministry of Physical Infrastructure and Transport

## Collection of objective questions of written exams for driving licence of category B (Car, Jeep, Delivery Van)

Q.N.	Question	Correct Answer			
		a	b	c	d
288.	<b>What drives the fan?</b> (a) Accelerator (b) Clutch (c) Fan belt (d) All of the above			√	
289.	<b>Which of the following indicates the level of fuel in vehicle?</b> (A) Fuel gauge (b) Speedometer (c) Thermometer (d) All of the above	√			
290.	<b>What is not the main function of the accelerator?</b> (a) To heat the engine. (b) To close/stop oil. (c) To decrease pollution. (d) All of the above				√
291.	<b>Where does the steering not work?</b> (a) At gear (b) At engine (c) At brake (d) None of the above				√
292.	<b>What does the brake not work at?</b> (a) At engine (b) At gear (c) At steering (d) All of the above				√
293.	<b>What is the main source of electricity in vehicles?</b> (a) Fuel (b) Engine (c) Dynamo (d) Battery				√
294.	<b>What supplies mobil to different parts?</b> (a) Choke (b) Oil pump (c) Carburetor (d) All of the above		√		
295.	<b>Which oil is used in engine?</b> (a) Kerosene (b) Brake oil (c) Mobil (d) Diesel			√	
296.	<b>What is needed to start the diesel engine?</b> (a) Diesel and air. (b) Spark plug. (c) Petrol and air. (d) Current	√			
297.	<b>Which part does not work well if the wheels of vehicle are under water ?</b> (a) Light (b) Clutch (c) Footbrake (d) Handbrake			√	
298.	<b>What does it mean by C.C. in vehicle?</b> (a) The volume of engine cylinder. (b) Capacity of brake. (c) Capacity of gearbox. (d) All of the above	√			
299.	<b>Among the options, which one is the function of a workshop?</b> (a) To repair broken vehicles. (b) To do the finishing of vehicles (c) To build the body of vehicle. (d) All of the above				√
300.	<b>Among the options, what is the function of driving school?</b> (a) To help fill up license form. (b) To help register the license form (c) To help in trial examination. (d) To instruct how to drive.				√



Government of Nepal

Ministry of Physical Infrastructure and Transport

## Collection of objective questions of written exams for driving licence of category B (Car, Jeep, Delivery Van)

### 4. Conceptual knowledge related to environment pollution

Q.N.	Question	Correct Answer			
		a	b	c	d
301.	<b>What is meant by vehicle pollution?</b> (a) Mobil used in engine. (b) Fuel kept in vehicle (c) Dirt in the vehicle. (d) Smoke coming from vehicle				√
302.	<b>Which part of the vehicle affects the vehicular pollution?</b> (a) Brake (b) Gearbox (c) Fuel (d) The condition of engine				√
303.	<b>Which engine produces least pollution?</b> (a) Diesel engine. (b) Petrol engine. (c) Electric engine. (d) Coal engine.			√	
304.	<b>What kind of pollution is made by horn?</b> (a) Air pollution (b) Soil pollution (c) Water pollution (d) Sound pollution				√
305.	<b>Which vehicular engine among two-stroke and four-stroke engine makes more pollution?</b> (a) Two-stroke. (b) Four-stroke. (c) Both of them. (d) None of the above	√			
306.	<b>What kind of vehicle is more suitable for making a city pollution free?</b> (a) Electric. (b) Diesel. (c) Petrol. (d) Gas.	√			
307.	<b>Where is the pollution level of EV (Electric Vehicle) checked?</b> (a) Department of Transport Management (b) Electricity Authority (c) Transportation Management Office. (d) None of them				√
308.	<b>In which area should horn not be blown?</b> (a) Main road. (b) Area where there is traffic jam. (c) Area near school and hospital. (d) Area where there is demonstration			√	
309.	<b>From which part of vehicle does smoke exit?</b> (a) Silencer (b) Engine (c) Gear (d) Axle	√			
310.	<b>Which is the prevailing pollution standard in Nepal?</b> (a) 2054 B.S. (b) 2049 B.S. (c) 2069 B.S. (d) 2056 B.S.			√	
311.	<b>Why is vehicular pollution test done?</b> (a) To know the condition of the vehicle (b) To save the vehicle from accident (c) Both a and b (d) None of them.			√	
312.	<b>Which office does the vehicular pollution test?</b> (a) Vehicle Fitness Test Center (b) Transportation Management Office. (c) Traffic Police Office. (d) Both a and b				√





Government of Nepal

Ministry of Physical Infrastructure and Transport

## Collection of objective questions of written exams for driving licence of category B (Car, Jeep, Delivery Van)

Q.N.	Question	Correct Answer			
		a	b	c	d
313.	<b>Among the vehicles mentioned below, to which kind of vehicle is vehicular pollution Standards, 2069 not applicable?</b> (a) Private vehicles. (b) Large buses. (c) Heavy equipment like dozer loaders etc. (d) All of them			√	
314.	<b>What happens if one drives the vehicle with no pollution free sticker in restricted area?</b> (a) Fine (b) Confiscation of vehicle. (c) Imprisonment. (d) Both a and b	√			
315.	<b>What kind of vehicle's pollution is not checked?</b> (a) Vehicle run by petrol. (b) Electric vehicle. (c) Vehicle run by Diesel. (d) None of the above		√		
316.	<b>Which office doesn't do vehicular pollution test?</b> (a) Vehicle Fitness Test Center (b) Transportation Management Office . (c) Traffic Police Office. (d) None of them.			√	
317.	<b>What is normally checked in a vehicular pollution test?</b> (A) Brake. (b) Body. (c) Smoke. (d) Fuel.			√	
318.	<b>Which office does the work of vehicle fitness test?</b> A) Ministry for Physical Infrastructure and Transport. (b) Department of Transport Management (C) Traffic Police Office (d) Transport Management Office				√
319.	<b>What color sticker is attached to safe(clean) tempo?</b> (A) Blue. (b) Red. (c) Green. (d) None of them.			√	
320.	<b>Which pollution is caused by vehicular smoke?</b> (a) Air pollution (b) Soil pollution (c) Water pollution (d) Sound pollution	√			
321.	<b>Which fuel causes more pollution?</b> (a) Electrical. (b) Diesel. (c) Petrol. (d) Gas.			√	
322.	<b>For what kind of vehicle is fitness certificate needed?</b> (a) Private vehicle (b) Rental vehicle (c) Government vehicle (d) All of the above		√		
323.	<b>Where is motorcycle pollution test done?</b> (a) Transport Management Office. (b) Garage. (C) Workshop. (d) None of the above				√



Government of Nepal

Ministry of Physical Infrastructure and Transport

## Collection of objective questions of written exams for driving licence of category B (Car, Jeep, Delivery Van)

Q.N.	Question	Correct Answer			
		a	b	c	d
324.	<b>What is the color of pollution sticker?</b> (a) Green. (b) Blue. (c) Yellow. (d) Red	√			
325.	<b>What happens if one drives without testing vehicle's pollution level?</b> (a) Imprisonment. (b) Fine (c) Both a and b. (d) None of them		√		
326.	<b>How often is government vehicle's pollution test done?</b> (a) Every 6 months. (b) Every year. (c) Every Two years. (d) Every three months.		√		
327.	<b>What does the green sticker used in vehicle indicate?</b> (s) Vehicle pollution is checked. (b) Vehicle without pollution (c) Both a and b. (d) None of them		√		
328.	<b>Among the vehicles below, which one doesn't emit smoke?</b> (a) Bus. (b) Mini bus. (c) Truck. (d) Trolleybus				√
329.	<b>How can pollution be decreased?</b> (a) Using A/C & heater less (b) By keeping the engine in good condition (c) By driving vehicle less (d) All of the above				√
330.	<b>Where is vehicular pollution law/regulation implemented ?</b> (a) In Kathmandu Valley. (b) In Birgunj market. (c) In Biratnagar Meptropolitan (d) All over Nepal	√			



**Government of Nepal**  
**Ministry of Physical Infrastructure and Transport**

## Collection of objective questions of written exams for driving licence of category B (Car, Jeep, Delivery Van)

### 5. Knowledge related to accidental awareness

Q.N.	Question	Correct Answer			
		a	b	c	d
331.	<b>What does road safety mean?</b> (a) The drivers should be careful. (b) Follow the vehicular rules (c) To give priority to vehicles running along the road. (d) All of the above.				√
332.	<b>Which light should be turned on while turning the vehicle?</b> (a) Fog light. (b) Head light. (c) Brake light. (d) Side light.				√
333.	<b>What does the red traffic light mean?</b> (a) Signal to be alert (b) signal to stop the vehicle. (c) Signal to be safe (d) None of them		√		
334.	<b>When does one have to blow horn?</b> (a) At the time of emergency/necessity (b) Never to blow the horn (c) Blow the horn at crowded places. (d) All of the above	√			
335.	<b>In what condition should one stop vehicle?</b> (a) If the traffic light signals to stop at crossroad. (b) At zebra Crossing where people are crossing the road. (c) If traffic police signals to stop. (d) All of the above.				√
336.	<b>In which part of the road is the zebra crossing on?</b> (a) Main chowk. (b) All chowks. (c) Anywhere except chowk. (d) All of the above	√			
337.	<b>In what kind of place does the driver have to slow the speed?</b> (a) School area (b) Densely populated area (c) Crossroad (d) All of the above				√
338.	<b>What happens if one drives in high speed ?</b> (a) It helps to develop the skills (b) One reaches the destination soon. (c) It might invite accidents. (d) Vehicle becomes old.			√	
339.	<b>What is Zebra Crossing made for?</b> (a) To help vehicle cross the road. (b) To help animal cross the road. (c) To stop the vehicles. (d) To help pedestrians cross the road.				√
340.	<b>What shouldn't be done while driving in front of school and hospital?</b> (a) Blow horn. (b) Drive the vehicle high speed. (c) To overtake. (d) All of the above				√



Government of Nepal

Ministry of Physical Infrastructure and Transport

## Collection of objective questions of written exams for driving licence of category B (Car, Jeep, Delivery Van)

Q.N.	Question	Correct Answer			
		a	b	c	d
341.	<b>What is the speed limit one has to drive in densely populated area?</b> (a) Less than 40 KM/Hour. (b) More than 40 KM/Hour. (c) Less than 35 KM/Hour. (d) All of the above.	√			
342.	<b>Whom should the driver inform if accident happens?</b> (a) Nearby police (b) Nearby resident (c) Relatives of those who are injured in accident (d) All of the above.				√
343.	<b>What does a driver have to do when a pedestrian is crossing the road?</b> (a) To gesture by hand. (b) To increase the speed. (c) To return the vehicle (d) To decrease the speed & let the pedestrian cross the road				√
344.	<b>Why does one have to use seat belt while driving?</b> (a) To look good. (b) To save himself/herself from the punishment of traffic police (c) To bear less injuries if accident happens. (d) All of the above			√	
345.	<b>What would you do if the tyre gets punctured on the way?</b> (a) To keep on driving by ignoring it (b) To leave the vehicle at the side and go. (c) To use spare tyre and get it repaired. (d) None of the above			√	
346.	<b>What should be done while turning the vehicle to left side?</b> (a) To jam on brake and stop. (b) To turn by turning on right side light. (c) To turn by turning the left side light. (d) Blow the horn harshly			√	
347.	<b>In the view of safety, what time is considered to be not suitable for driving?</b> (a) While it is raining heavily. (b) While it is snowing densly. (c) All the time of thick fogging. (d) All of the above				√
348.	<b>What is the name of the instrument that police use to find out the speed of the vehicle while driving ?</b> (a) Radar gun. (b) lidar gun. (c) Speed gun. (d) All of them			√	
349.	<b>What does red traffic light mean?</b> (a) Be alert. (b) Stop the vehicle (c) Go. (d) None of them.		√		
350.	<b>In what way should one overtake another vehicle ?</b>				√



Government of Nepal

Ministry of Physical Infrastructure and Transport

## Collection of objective questions of written exams for driving licence of category B (Car, Jeep, Delivery Van)

Q.N.	Question	Correct Answer			
		a	b	c	d
	(a) Always from the right. (b) By blowing the horn. (c) If road is straight and safe. (d) All of the above				
351.	<b>Which vehicle should be given first priority at the round turning ?</b> (a) Vehicle coming from the right side. (b) Vehicle coming from the left side. (c) Vehicle coming from the back side. (d) None of the above	√			
352.	<b>Which side should be used while overtaking?</b> (a) From left side (b) From right side (c) From both sides (d) From none side		√		
353.	<b>To what kind of injured person from accident should artificial oxygen be given?</b> (a) Normal injured. (b) Bleeding injured. (c) Unconscious injured. (d) Conscious injured			√	
354.	<b>Who shouldn't be informed when accident happens?</b> (a) Nearby police. (b) Close relatives. (c) Relatives of injured. (d) Pedestrian				√
355.	<b>How would one signal the vehicle ahead while overtaking?</b> (a) By turning head light (b) By blowing horn (c) By Turning side light (d) All of the above				√
356.	<b>Why is there more possibility to have accidents at night than day?</b> (a) Because of more speed and less visibility. (b) Because of more vehicle running (c) Because of passengers drunkenness (d) None of the above	√			
357.	<b>In what kind of place does one not have to lower the speed?</b> (a) Densely populated areas. (b) School areas. (c) Crossroads. (d) Open road.				√
358.	<b>What shouldn't be done while driving?</b> (a) To talk on mobile. (b) To drink alcohol. (c) To quarrel/Fight with the passenger. (d) All of the above				√
359.	<b>What lights should be turned on while parking the vehicle at night ?</b> (a) Head light. (b) Side light. (c) Parking light (d) None of them.			√	
360.	<b>What should be done if the vehicle from behind tries to overtake ?</b>		√		



Government of Nepal

Ministry of Physical Infrastructure and Transport

## Collection of objective questions of written exams for driving licence of category B (Car, Jeep, Delivery Van)

Q.N.	Question	Correct Answer			
		a	b	c	d
	(s) To increase the speed. (b) To slow the speed & let it go. (c) Blow the horn (d) Nothing to be done				
361.	<b>Which gear should be used while driving uphill?</b> (A) First gear. (b) Second gear. (c) Third gear. (d) Forth gear.	√			
362.	<b>At what time does one have to look at looking glass?</b> (a) While overtaking. (b) While reversing (c) While turning left . (d) All of the above.				√
363.	<b>What should not be done if the vehicle from behind tries to overtake?</b> (a) To slow speed & give side (b) To increase the speed (c) To blow horn (d) Both B and C				√
364.	<b>What condition of the driver is necessary while driving?</b> (a) To put on clean cloth. (b) Not have drunk alcohol. (c) To put on shoes (d) Not to have slept at night.		√		
365.	<b>Whom should the driver inform if mechnical condition of the vehicle is not good?</b> (a) Traffic Police. (b) Nearby Police station. (c) Vehicle owner or manager. (d) District Administration Office.			√	
366.	<b>In what kind of place does one have to stop the vehicle ?</b> (a) Bus stop. (b) Crowded place. (c) Parking spot. (d) Middle of the road.			√	
367.	<b>What should a driver do when entering main road from side road?</b> (A) To enter at high speed. (b) To stop the vehicle in the middle of the main road. (c) To enter at safe speed with signal (d) To enter without signal.			√	
368.	<b>What should be done while reversing the vehicle?</b> (a) To race the engine. (b) To look through rear view mirror to see whether there is pedestrian or vehicle (c) To look back after stopping and getting down from the vehicle.. (d) To blow horn		√		
369.	<b>What would you do before you start your vehicle?</b>				



Government of Nepal

Ministry of Physical Infrastructure and Transport

## Collection of objective questions of written exams for driving licence of category B (Car, Jeep, Delivery Van)

Q.N.	Question	Correct Answer			
		a	b	c	d
	(a) To check oil. (b) To check gear. (c) To check brake and indicator light. (d) All of the above				√
370.	<b>In what condition is it appropriate to use hand brake?</b> (a) While starting vehicle. (b) While parking vehicle. (C) While stopping vehicle. (d) While stopping it immediately		√		
371.	<b>What is the cause of vehicular accident?</b> (a) Human error. (b) Mechanical error. (c) Miserable condition of road. (d) All of the above				√
372.	<b>Which vehicle has more possibility to have accident while changing lane immediately at one sided road?</b> (a) Vehicle coming from front side. (b) Vehicle coming from right side (c) Vehicle coming from left side. (d) Vehicle coming from back side				√
373.	<b>What should be done while reversing the vehicle?</b> (a) To use back gear. (b) To look side mirror. (c) To press on accelerator. (d) All of the above				√
374.	<b>What should be condition of the driver?</b> (a) To have good eyesight. (b) Not tired. (c) Not drunk (d) All of the above				√
375.	<b>How should one drive if he/she is in a hurry?</b> (A) keep on blowing the horn time & again. (b) keep on driving by turning on brake light and moving hands. (c) drive at safe speed by turning on emergency lights. (d) look for measure to reach as soon as possible.			√	
376.	<b>How would one drive vehicle at turning?</b> (a) By driving in low gear (b) By lowering speed (c) By blowing the horn 2-3 times before turning. (d) All of the above.				√
377.	<b>Who is responsible to effectuate the compensation to victim on vehicular accident?</b> (a) Vehicle owner (b) Chief District Officer (c) Traffic Police (d) Traffic Management Office		√		
378.	<b>What happens if one drives vehicle being drunk?</b> (a) Accident might happen (b) Fines (c) Both a and b (d) It becomes good/funny			√	



Government of Nepal

Ministry of Physical Infrastructure and Transport

## Collection of objective questions of written exams for driving licence of category B (Car, Jeep, Delivery Van)

Q.N.	Question	Correct Answer			
		a	b	c	d
379.	<b>Why should one use seatbelt?</b> (a) For rest (b) To save oneself from fine (c) For safe journey (d) None of the above			√	
380.	<b>What should first be done to the injured person in an accident?</b> (a) To take him/her to hospital. (b) To do primary treatment. (c) To remove him/her from crowd. (d) Nothing to be done		√		
381.	Does one have to immediately give food to injured person in accident or not? (A) Yes (b) No (c) As per the injured wish (d) To give food as per onlooker's advice		√		
382.	<b>What might happen while driving during rain?</b> (a) Vehicle tyres might get slipped (b) Brakes might not work when they are required (c) Muddy water might be splashed to pedestrian (d) All of the above.				√
383.	<b>What should not be done at zebra crossing?</b> (a) To drive speedily. (b) To let the traffic police stand there. (c) To stop the vehicle. (d) All of the above				√
384.	<b>What should be done while turning the vehicle to right?</b> (a) By turning on left side light. (b) By turning on headlight. (c) By turning on right side light. (d) None of the above			√	
385.	<b>What should be done to stop the vehicle at upward road?</b> (a) To use wedge (b) To keep the vehicle at first gear. (c) To use hand brake. (d) All of the above				√
386.	<b>Which light should be turned on to see vehicle at the time of thick fog or mist?</b> (a) Headlights. (b) Brake lights. (c) Fog lights. (d) Side lights			√	
387.	What should be done to your vehicle when you are close to T-Junction (a) To let left & right side vehicle pass (b) To stop. (c) Go ahead only by lowering the speed when the road is safe (d) All of the above				√
388.	<b>Why is mobil used in vehicles?</b> A) To save fuel (b) To help engine work well/easy (c) To drive vehicle at high speed (d) All of the above				√





Government of Nepal

Ministry of Physical Infrastructure and Transport

## Collection of objective questions of written exams for driving licence of category B (Car, Jeep, Delivery Van)

Q.N.	Question	Correct Answer			
		a	b	c	d
389.	<b>What does the black smoke coming from vehicle indicate?</b> (a) Silencer pipe is broken. (b) silencer pipe missing (c) Engine is not in good condition (d) No fuel.			√	
390.	<b>In what condition is driving vehicle by pressing the clutch dangerous?</b> (a) While driving downward. (b) While driving at high speed (c) While driving at turning . (d) All of the above	√			



Government of Nepal

Ministry of Physical Infrastructure and Transport

## Collection of objective questions of written exams for driving licence of category B (Car, Jeep, Delivery Van)

### 6. Knowledge related to traffic signals

Q.N.	Question	Correct Answer			
		a	b	c	d
391.	<b>What should be done when green light glows when you reach zebra crossing?</b> (a) To keep on going ahead. (b) To stop the vehicle. (c) To be prepared to drive the vehicle ahead. (d) All of the above	√			
392.	<b>What should be done when yellow light glows when you reach zebra crossing?</b> (a) To keep on going ahead (b) To stop the vehicle.. (c) To be prepared to drive the vehicle ahead. (d) All of the above			√	
393.	<b>What does zero motion line indicate?</b> (a) To stop the vehicle. (b) To lower/decrease the speed. (c) To turn back the vehicle (d) To drive the vehicle at high speed	√			
394.	<b>What should be done when red light glows when you reach zebra crossing?</b> (a) To keep on going ahead (b) To stop the vehicle.. (c) To be prepared to drive the vehicle ahead. (d) All of the above		√		
395.	<b>What should be understood when the vehicle's rear red light turns on?</b> (a) To have changed the gear. (b) To have given the side. (C) To be using the brakes (d) To be increasing the speed.			√	
396.	<b>What does a triangular shaped traffic light sign indicate?</b> (a) Information (b) Awareness (c) Prohibition (d) All of the above		√		
397.	<b>What does a rectangular/square shaped traffic light sign not indicate?</b> a) Information (b) Awareness (c) Prohibition (d) Both B and C				√
398.	<b>What does circular shaped traffic light sign indicate?</b> a) Information. (b) Awareness. (c) Prohibition (d) All of them			√	
399.	<b>Why is line drawn on the road?</b> (a) To make the movement of vehicle easy. (b) To make road good.	√			



Government of Nepal

Ministry of Physical Infrastructure and Transport

## Collection of objective questions of written exams for driving licence of category B (Car, Jeep, Delivery Van)



Q.N.	Question	Correct Answer			
		a	b	c	d
	(c) To charge (d) All of the above				
400.	<b>Among the colours below, which one isn't used in line drawn on the road?</b> (a) White. (b) Yellow. (c) Red. (d) Black.			√	
401.	<b>Which colour isn't used in zebra crossing line?</b> (a) Yellow. (b) Black (c) White (d) None of the above	√			
402.	<b>What does the continuous white line painted in the middle of the road indicate?</b> (a) The line cannot be crossed. (b) The line can be crossed. (b) Both a & b (d) None of the above	√			
403.	<b>How many types of colour are there in traffic light?</b> (a) 2 types. (b) 3 types. (c) 4 types. (d) 5 types.		√		
404.	<b>To whom is the signal given by the traffic police?</b> (a) Vehicle drivers. (b) Pedestrians. (c) Pedestrians and vehicle drivers. (d) None of them.			√	
405.	<b>Among the colours given below, which isn't traffic light colour?</b> (a) Yellow. (b) Red, (c) Green. (d) Black.				√
406.	<b>What does automatic traffic signal mean?</b> (a) The signal kept at the side of road. (b) Electric light kept at the road. (c) Signal given by the traffic police. (d) Non of them.		√		
407.	<b>Whose duty is it to follow the traffic signs?</b> (a) Vehicle driver. (b) Pedestrian (c) Large vehicle. (d) All of the above				√
408.	<b>What does traffic signal mean?</b> (a) The signal given by vehicle driver. (b) The signal given by police. (c) The signal to maintain the rules of road. (d) All of the above			√	



Government of Nepal

Ministry of Physical Infrastructure and Transport

## Collection of objective questions of written exams for driving licence of category B (Car, Jeep, Delivery Van)








Q.N.	Question	Correct Answer			
		a	b	c	d
409.	<b>How many types of international traffic sign are there?</b> (a) Two types. (b) Three types. (c) Four types (d) No Clarity.		√		
410.	<b>In which part of road is the divider line drawn?</b> (a) On right side. (b) On left side. (c) On the middle of road. (d) Wherever it is painted.			√	
411.	<b>What colour board is there on highway to signal direction?</b> (a) Green. (b) Red. (c) Yellow. (d) Black.	√			
412.	<b>What is the another name for lane line and zebra crossing?</b> (a) Road marking (b) Traffic marking. (c) Hotspot (d) All the above	√			
413.	<b>What is the shape of restrictive/prohibitive traffic sign?</b> (a) Circular. (b) Triangular. (c) Square. (d) Rectangular.	√			
414.	<b>Why are traffic lights kept at crossroad?</b> (a) So that driver could see it at night. (b) To control traffic (c) To turn the vehicle. (d) To help vehicle park.		√		
415.	<b>Among the given options, which doesn't control traffic on the road?</b> (a) Traffic police. (b) Department of Transport Management (c) Road line. (d) Traffic signal.		√		
416.	 <b>What does this traffic sign indicate?</b> (a) Square (b) Rectangular (c) Parking spot (d) Hospital			√	
417.	 <b>What does this traffic sign indicate?</b> (a) One way (b) Two way (c) East side (d) West side	√			



Government of Nepal

Ministry of Physical Infrastructure and Transport

## Collection of objective questions of written exams for driving licence of category B (Car, Jeep, Delivery Van)








Q.N.	Question	Correct Answer			
		a	b	c	d
418.	 <p><b>What does this traffic sign indicate?</b> (a) Shop (b) Workshop (c) Residence (d) Parking spot</p>		√		
419.	 <p><b>What does this traffic sign indicate?</b> (a) Religious place. (b) Residential area. (c) Hospital. (d) Primary treatment</p>				√
420.	 <p><b>What does this traffic sign indicate?</b> (a) Uphill road (b) One way. (c) Overtaking place. (d) Right turn.</p>			√	
421.	 <p><b>What does this traffic sign indicate?</b> (a) Telephone. (b) Internet. (c) Tool. (d) Police.</p>	√			
422.	 <p><b>What does this traffic sign indicate?</b> (a) Telephone service. (b) Trunk service. (c) T-Junction (d) Dead end.</p>				√
423.	 <p><b>What does this traffic sign indicate?</b> (a) Pedestrian way (b) School (c) Police (d) Broken way</p>	√			
424.	 <p><b>What does this traffic sign indicate?</b> (a) Vehicle parking spot (b) Hospital (c) Machine (d) Petrol pump</p>				√



Government of Nepal

Ministry of Physical Infrastructure and Transport

## Collection of objective questions of written exams for driving licence of category B (Car, Jeep, Delivery Van)









Q.N.	Question	Correct Answer			
		a	b	c	d
425.	 <p><b>What does this traffic sign indicate?</b>            (a) Rest place. (b) Refreshment center (c) Shelter place            (d) Hospital.</p>			√	
426.	 <p><b>What does this traffic sign indicate?</b>            (a) Rest place. (b) Hospital (c) Residential area            (d) Shelter place.</p>		√		
427.	 <p><b>What does this traffic sign indicate?</b>            (a) House (b) Temple. (c) Restaurant (d) School.</p>			√	
428.	 <p><b>What does this traffic sign indicate?</b>            (a) Way for pedestrian &amp; Cyclist (b) School            (c) Children. (d) Crowded place.</p>	√			
429.	 <p><b>What does this traffic sign indicate?</b>            (a) Bicycle Repairing (b) Way of bicycle            (c) No Bicycle (d) Cyclist.</p>		√		
430.	 <p><b>What does this traffic sign indicate?</b>            (a) No parking. (b) Bus stop            (c) Bus Station (d) Parking spot.</p>		√		
431.	 <p><b>What does this traffic sign indicate?</b>            (a) Forest area (b) Temple. (c) Picnic Spot (d) School.</p>			√	



Government of Nepal

Ministry of Physical Infrastructure and Transport

## Collection of objective questions of written exams for driving licence of category B (Car, Jeep, Delivery Van)









Q.N.	Question	Correct Answer			
		a	b	c	d
432.	 <p><b>What does this traffic sign indicate?</b> (a) Zebra cross. (b) Resting Place (d) Parking spot (d) School.</p>	√			
433.	 <p><b>What does this traffic sign indicate?</b> (a) Skidding place (b) Overtaking place (c) To stop/park if urgent (d) Forest area.</p>			√	
434.	 <p><b>What does this traffic sign indicate?</b> (a) Lines beside the road (b) Gravel Road. (c) Road (d) Parking</p>	√			
435.	 <p><b>What does this traffic sign indicate?</b> (a) Pitch road (b) Overtaking place (c) Lines in the middle of road. (d) Stoppage</p>			√	
436.	 <p><b>What does this traffic sign indicate?</b> (a) No entry. (b) No parking. (c) No overtaking. (d) No stoppage.</p>				√
437.	 <p><b>What does this traffic sign indicate?</b> (a) No entry. (b) No parking (c) Parking spot. (d) No public</p>		√		
438.	 <p><b>What does this traffic sign indicate?</b> (a) No entry. (b) No right turn. (c) Parking spot (d) Stoppage</p>	√			
439.	 <p><b>What does this traffice sign mean/indicate ?</b> (a) No parking (b) Overtaking place. (c) Parking spot. (d) No right turn.</p>				√



Government of Nepal

Ministry of Physical Infrastructure and Transport

## Collection of objective questions of written exams for driving licence of category B (Car, Jeep, Delivery Van)

Q.N.	Question	Correct Answer			
		a	b	c	d
440.	 <p><b>What does this traffic sign mean/indicate ?</b>            (a) No parking.      (b) No left turn.            (c) Parking spot.      (d) Turn right.</p>		√		
441.	 <p><b>What does this traffic sign indicate?</b>            (a) No right turn.      (b) No left turn.            (c) No U turn.      (d) Overtaking place.</p>			√	
442.	 <p><b>What does this traffic sign indicate?</b>            (a) No parking.      (b) Maximum speed limit.            (c) Parking spot.      (d) Go ahead.</p>		√		
443.	 <p><b>What does this traffic sign indicate?</b>            (a) Parking.      (b) Overtaking Place.            (c) Vehicle width limit      (d) School area.</p>			√	
444.	 <p><b>What does this traffic sign indicate?</b>            (a) No overtake.      (b) Overtaking place.            (c) One way      (d) Two way</p>	√			
445.	 <p><b>What does this traffic sign indicate?</b>            (a) No turning.      (b ) Turning round            (c) Speed limit end.      (d) No horn.</p>				√
446.	 <p><b>What does this traffic sign indicate?</b>            (a) Stop      (b) Stop, look &amp; go.            (c) Parking spot.      (d) Go straight.</p>		√		
447.	 <p><b>What does this traffic sign indicate?</b>            (a) No parking.      (b) Overtaking place.            (c) Parking spot.      (d) Speed limit end.</p>				√













Government of Nepal

Ministry of Physical Infrastructure and Transport

## Collection of objective questions of written exams for driving licence of category B (Car, Jeep, Delivery Van)







Q.N.	Question	Correct Answer			
		a	b	c	d
448.	 <p><b>What does this traffic sign indicate?</b>            (a) Prohibition to go straight (b) Go straight only            (c) Parking spot (d) Turn left by going ahead.</p>		√		
449.	 <p><b>What does this traffic sign indicate?</b>            (a) Go straight only. (b) Go from any way.            (c) Turn left by going ahead. (d) Speed limit end.</p>			√	
450.	 <p><b>What does this traffic sign indicate?</b>            (a) Go from anyway. (b) Go right, left or straight.            (c) Turn Left. (d) Turn right.</p>	√			
451.	 <p><b>What does this traffic sign indicate?</b>            (a) Turn right (b) Let the vehicle coming from right of small circular road            (c) Go by turning round. (d) Right turning.</p>		√		
452.	 <p><b>What does this traffic sign indicate?</b>            (a) Vehicle weight limit (b) Axle weight limit            (c) Vehicle length limit . (c) Vehicle width limit.</p>	√			
453.	 <p><b>What does this traffic sign indicate?</b>            (a) Turn right. (b) Go ahead. (c) Turn Left. (d) Turn right</p>			√	
454.	 <p><b>What does this traffic sign indicate?</b>            (a) Left turning. (b) Take to left side.            (c) Turn left. (d) Turn right.</p>		√		
455.	 <p><b>What does this traffic sign indicate?</b></p>	√			



Government of Nepal

Ministry of Physical Infrastructure and Transport

## Collection of objective questions of written exams for driving licence of category B (Car, Jeep, Delivery Van)








Q.N.	Question	Correct Answer			
		a	b	c	d
	(a) One way traffic (b) Two way traffic (c) Go straight ahead. (d) Go ahead.				
456.	 What does this traffic sign indicate? (a) Stop, look & go. (b) Stop (c) Stop & go (d) Go			√	
457.	 What does this traffic sign indicate? (a) No truck. (b) No vehicle. (c) No parking. (d) Vehicle scrap spot	√			
458.	 What does this traffic sign mean/indicate ? (a) Vehicle height limit (b) Vehicle length limit (c) Vehicle width limit (d) Go only for 10 Meters.		√		
459.	 What does this traffic sign indicate? (a) Vehicle width limit. (b) Vehicle height should exactly be 4.4 m (c) Axle weight limit. (d) Vehicle height limit.				√
460.	 What does this traffic sign indicate? (a) Vehicle width limit. (b) Axle weight limit. (c) Vehicle height limit. (d) Vehicle length limit		√		
461.	 What does this traffic sign indicate? (a) No oxen cart. (b) No vehicle. (c) Vehicle weight limit. (d) Only Cart.	√			



Government of Nepal

Ministry of Physical Infrastructure and Transport

## Collection of objective questions of written exams for driving licence of category B (Car, Jeep, Delivery Van)








Q.N.	Question	Correct Answer			
		a	b	c	d
462.	 <p><b>What does this traffic sign indicate?</b>            (a) Circle (b) Go through round turning.            (c) Going place. (d) Go (Temporary sign)</p>				√
463.	 <p><b>What does this traffic sign indicate?</b>            (a) Y Junction. (b) T Junction. (d) Dead end (d) Turn to T</p>		√		
464.	 <p><b>What does this traffic sign indicate?</b>            (a) Rock falling. (b) Men at work.            (c) Dangerous (d) Safe place</p>			√	
465.	 <p><b>What does this traffic sign indicate?</b>            (a) Two way road straight ahead . (b) Two way.            (c) Vehicle may come from front side. (d) One way</p>	√			
466.	 <p><b>What does this traffic sign indicate?</b>            (a) Two way road straight ahead            (b) Vehicle may come from ahead            (c) Two way road ahead.            (d) One way.</p>			√	
467.	 <p><b>What does this traffic sign indicate?</b>            (a) Turn Left. (b) Turn right. (c) Turning. (d) Round turning.</p>		√		
468.	 <p><b>What does this traffic sign indicate?</b>            (a) Turn right. (b) Turn full right. (c) Turn Left. (d) Turning.</p>		√		



Government of Nepal

Ministry of Physical Infrastructure and Transport

## Collection of objective questions of written exams for driving licence of category B (Car, Jeep, Delivery Van)








Q.N.	Question	Correct Answer			
		a	b	c	d
469.	 <p><b>What does this traffic sign indicate?</b>            (a) Narrow bridge.      (b) Narrow road            (c) One way road.      (d) Two way road.</p>	√			
470.	 <p><b>What does this traffic sign indicate?</b>            (a) Slippery road. (b) Upward way of hill.            (c) Steep uphill      (d) Bumped road</p>			√	
471.	 <p><b>What does this traffic sign indicate?</b>            (a) Dangerous dip road (b) Dangerous bulged road.            (c) Downward road.      (d) Go straight ahead.</p>	√			
472.	 <p><b>What does this traffic sign indicate?</b>            (a) Narrow bridge (b) Narrow road from both side.            (c) Narrow Road      (d) One way</p>		√		
473.	 <p><b>What does this traffic sign indicate?</b>            (a) Rock falling place. (b) Steep upward way.            (c) Riverside.      (d) Dangerous slope.</p>	√			
474.	 <p><b>What does this traffic sign indicate?</b>            (a) Narrow road from the left side.            (b) Over taking place.            (c) Narrow road from the right side.            (d) Going place/go.</p>			√	
475.	 <p><b>What does this traffic sign indicate?</b>            (a) S Junction.      (b) Over taking place.            (c) Turning.      (d) Dual turning first left.</p>				√



Government of Nepal

Ministry of Physical Infrastructure and Transport









## Collection of objective questions of written exams for driving licence of category B (Car, Jeep, Delivery Van)

Q.N.	Question	Correct Answer			
		a	b	c	d
476.	 <p><b>What does this traffic sign indicate?</b>            (a) Y Junction.      (b) T Junction.            (c) Section road.      (d) Going place.</p>	√			
477.	 <p><b>What does this traffic sign indicate?</b>            (a) Left turn.      (b) Vehicle may come from left side            (c) Left Turning.      (d) Right traffic</p>		√		
478.	 <p><b>What does this traffic sign indicate?</b>            (a) Vehicle may come from right side.            (b) Overtaking place. (c) Parking spot. (d) Going place.</p>	√			
479.	 <p><b>What does this traffic sign indicate?</b>            (a) Gravel Road.      (b) Police Station            (c) Cross road.      (d) Round turning.</p>				√
480.	 <p><b>What does this traffic sign indicate?</b>            (a) Vehicle width limit.      (b) Front height limit.            (c) Vehicle axle weight limit. (d) Vehicle length limit.</p>		√		
481.	 <p><b>What does this traffic sign indicate?</b>            (a) Hospital.      (b) Road on all sides.            (c) Section road before crossroad            (d) Main road before crossroad</p>				√
482.	 <p><b>What does this traffic sign indicate?</b>            (a) Main road before crossroad.            (b) Section road before crossroad.            (c) Road from four sides.            (d) Go both left &amp; right.</p>		√		



**Government of Nepal**  
**Ministry of Physical Infrastructure and Transport**

## Collection of objective questions of written exams for driving licence of category B (Car, Jeep, Delivery Van)









Q.N.		Question	Correct Answer			
			a	b	c	d
483.		<b>What does this traffic sign indicate?</b> (a) Steep downward. (b) Steep uphill (c) Accidental Prone Area. (d) Only truck.	√			
484.		<b>What does this traffic sign mean/indicate?</b> (a) National park. (b) Reserved area. (c) Domestic animal. (d) No animal.			√	
485.		<b>What does this traffic sign indicate?</b> (a) Airport. (b) Aircraft at low height. (c) Aeroplane may come from front (d) High speed		√		
486.		<b>What does this traffic sign mean/indicate ?</b> (a) Uphill (b) Downhill (c) Bulged way. (d) Ditches.			√	
487.		<b>What does this traffic sign indicate?</b> (a) Section road on left (b) Go to left side. (c) Section road on right (d) Go straight ahead.			√	
488.		<b>What does this traffic sign indicate?</b> (a) One after another dual ways (b) Turn left (c) Turn right (d) Go straight ahead	√			
489.		<b>What does this traffic sign indicate?</b> (a) End of speed limit (b) Dual road end. (c) One way (d) Two way road		√		
490.		<b>What does this traffic sign indicate?</b> (a) Road pole. (b) Decorative light. (c) Traffic light. (d) Cat's eye			√	



Government of Nepal

Ministry of Physical Infrastructure and Transport

## Collection of objective questions of written exams for driving licence of category B (Car, Jeep, Delivery Van)



Q.N.	Question	Correct Answer			
		a	b	c	d
491.	 <p><b>What does this traffic sign mean/indicate ?</b>            (a) Wild animal.      (b) Dense forest            (c) National Park.      (d) Tiger.</p>	√			
492.	 <p><b>What does this traffic sign indicate?</b>            (a) Children      (b) Pedestrian ahead            (c) Zebra crossing.      (d) School area.</p>		√		
493.	 <p><b>What does this traffic sign indicate?</b>            (a) River side      (b) Steep downhill.            (c) Steep uphill      (d) Vehicle weight measurement</p>	√			
494.	 <p><b>What does this traffic sign indicate?</b>            (a) River side.      (b) Railway.            (c) No gate before rail/train.      (d) Dangerous road.</p>			√	
495.	 <p><b>What does this traffic sign mean/indicate?</b>            (a) Men at work.      (b) Road cleaning.            (c) Uphill road.      (d) Downhill road</p>	√			
496.	 <p><b>What does this traffic sign indicate?</b>            (a) No entry.      (b) Temporary Route Permit Centre            (c) Check post.      (d) Weighing bridge.</p>			√	
497.	 <p><b>What does this traffic sign indicate?</b>            (a) Pedestrian ahead.      (b) Children.            (c) Zebra crossing.      (d) School area</p>		√		
498.	 <p><b>What does this traffic sign indicate?</b>            (a) Sharp steep turning to the left      (b) Turn left            (c) Turn right.      (d) Downhill road</p>	√			



Government of Nepal

Ministry of Physical Infrastructure and Transport

## Collection of objective questions of written exams for driving licence of category B (Car, Jeep, Delivery Van)

Q.N.	Question	Correct Answer			
		a	b	c	d
499.	 <p><b>What does this traffic sign indicate?</b>            (a) Domestic animal.                      (b) Forest.            (c) Forest, wildlife reservation.      (d) Zoo</p>			√	
500.	 <p><b>What does this traffic sign indicate?</b>            (a) T junction (right &amp; left turning).      (b) Y junction.            (c) Steep turning.                              (d) Steep turning to left side</p>	√			





Government of Nepal

Ministry of Physical Infrastructure and Transport

## Collection of objective questions of written exams for driving licence of category B (Car, Jeep, Delivery Van)

### Instructions to Transport Management Office

1. Offices have to prepare questions for written exam from this collection only.
2. The duration of written exam is 30 minutes.
3. The pass marks of written is 60 at minimum.
4. The questions should be asked from each section as per their marks on the basis of the following table/chart:

S.n.	Area of Questions	Total no. of questions	Questions asked in exam		
			No. of questions	Marks per question	Full Marks
1	Knowledge related to driving	130	6	4	24
2	Knowledge related to vehicular act/regulation	90	5	4	20
3	Technical or mechanical knowledge of vehicle	80	3	4	12
4	Conceptual knowledge related to environment pollution	30	2	4	8
5	Knowledge related to accidental awareness	60	3	4	12
6	Knowledge related to traffic signals	110	6	4	24
	<b>Total</b>	<b>500</b>	<b>25</b>	<b>-</b>	<b>100</b>

=== 0 ===